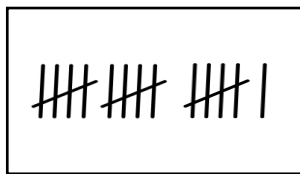


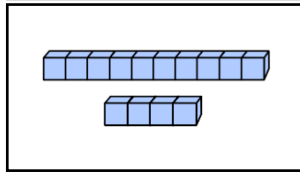
One more and one less



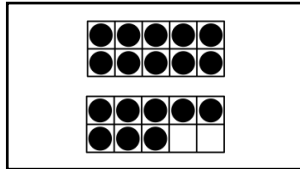
1 Draw a line to match one **more** number than the picture representation.



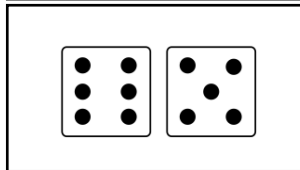
14



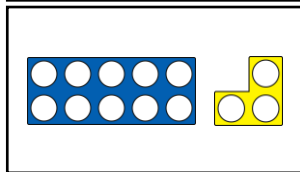
19



15

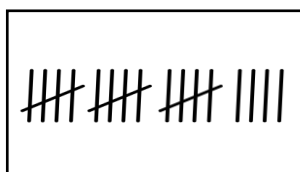


17

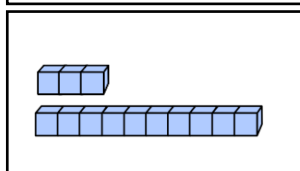


12

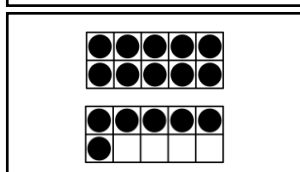
2 Draw a line to match one **less** number than the picture representation.



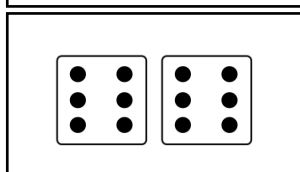
15



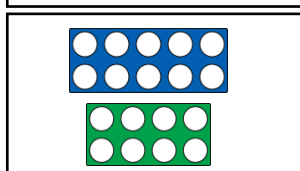
18



17



11



12

One more and one less



1 Complete to show one **more** and one **less**.

one less		one more
	← 11 →	
	← 15 →	
	← 19 →	

2 Complete to show one **more** and one **less**.

one less		one more
	← →	
	← →	

3 There is a mistake in the picture representation below.

one less		one more
	← 12 →	

Explain what the mistake is and how it can be corrected.

One more and one less



1 Complete to show one **more** and one **less**.

one less				one more
<input type="text"/>	←		→	<input type="text"/>
<input type="text"/>	←		→	<input type="text"/>
<input type="text"/>	←		→	<input type="text"/>
<input type="text"/>	←		→	<input type="text"/>

2 Complete to show one **more** and one **less**.

one less				one more
<input type="text"/>	←	11	→	<input type="text"/>
<input type="text"/>	←	15	→	<input type="text"/>

3 Complete to show one **more** and one **less**.

one less				one more
<input type="text"/>	←	<input type="text"/>	→	
	←	<input type="text"/>	→	<input type="text"/>

One more and one less



1 Complete the number problems.

a I am one **more** than 3... I am the number _____.

b I am one **more** than 12... I am the number _____.

c I am one **less** than 8... I am the number _____.

d I am one **more** than 17... I am the number _____.

e I am one **more** than 15... I am the number _____.

2



My cousin is one year older than me. I am one year older than my best friend who is 14.



How old is Beth? _____

How old is her cousin? _____

3

Dom thinks of a number.
One **more** than his number is 15.

Asha thinks of a number.
One **less** than her number is 12.



Write Dom's and Asha's numbers in the thought bubbles.

One more and one less



1 Complete the table to show the starting number, one **more** and one **less**.

one less		one more
13		15
11		13

2 Complete to show one **more** and one **less**.

one less		one more
	16	
	13	

3 Complete to show one **more** and one **less**.

one less		one more

One more and one less



1



My sister is 14.
Our brother is one year younger.
Our cousin is one year older than my brother.
I am one year older than our cousin.

How old is...

Beth? _____

Her brother? _____

Her cousin? _____

2



One **more** than twelve is less than one **less** than 14.

True

False

Explain how you know.

3 Mark the answers with a tick (✓) or cross (X) and correct any mistakes.

a One **more** than 17 is 18.

b One **less** than twenty is eighteen.

a One **less** than sixteen is fifteen.

4 One **less** than 12 is one **more** than _____ which is one **more** than _____.

5 One **more** than 17 is one **less** than _____ which is one **less** than _____.